

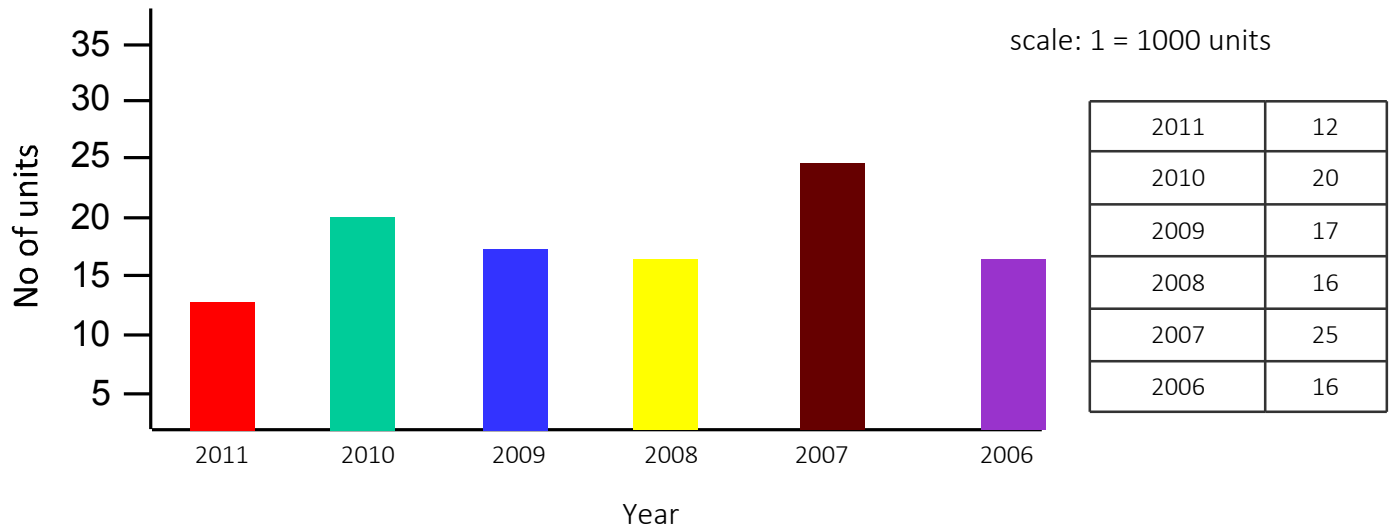
Graphical analysis

Bar graph tables



Name: _____ Date: ____/____/____ Score _____

Sales of Audio systems by ABC Pvt Ltd.



Questions:

(1) What is the difference in the sales of Audio systems between year 2006 & 2009?

Solution: _____

(2) The company sold least no. of Audio systems in year _____.

Solution: _____

(3) The highest sales of Audio systems was in year _____.

Solution: _____

(4) What is the total sales of Audio systems in these years?

Solution: _____

(5) What is the highest sales of Audio systems achieved in any year?

Solution: _____

(6) What is the lowest sales of Audio systems achieved in any year?

Solution: _____

(7) What is the average sales of Audio systems during this period?

Solution: _____

(8) If selling price of a unit was Rs. 3400 then what was the total revenue generated in year 2007?

Solution: _____

(9) If selling price of a unit was Rs. 3100 and the company incurred Rs. 3000 in production of one unit. What is the profit or loss of the company in the year 2006?

Solution: _____

(10) If selling price per unit is fixed for last three years which is Rs. 3200 and cost price is Rs. 3400. In which year the company made maximum profit in these three years?

Solution: _____

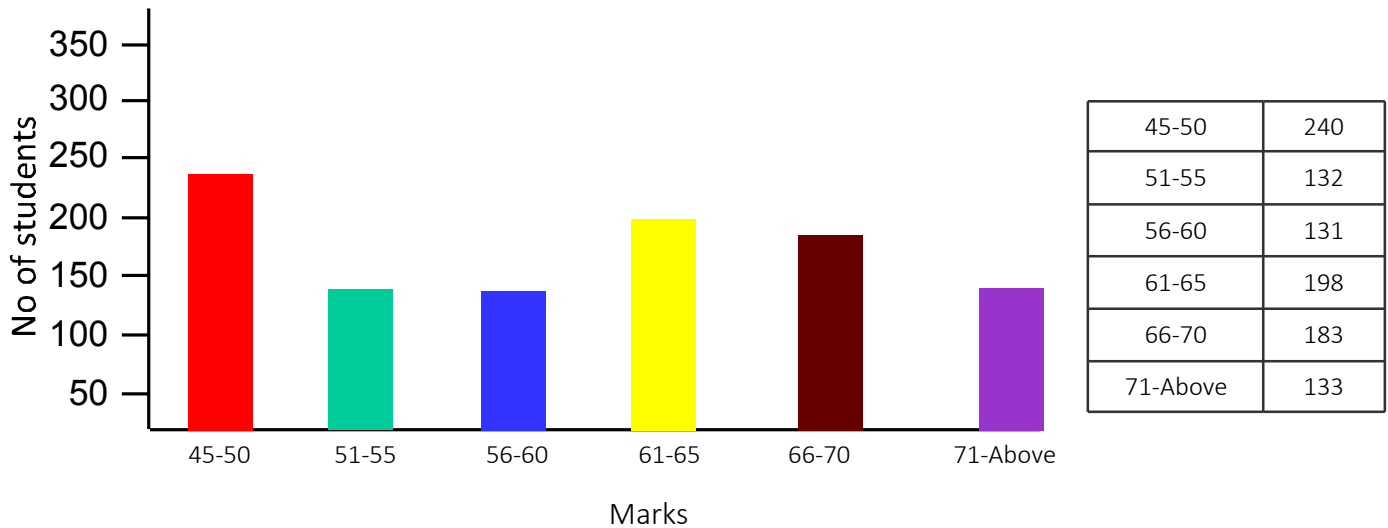
Graphical analysis

Bar graph tables



Name: _____ Date: ____/____/____ Score _____

marks students of First year of The Catalyst Management Institute



Questions:

(1) How many students are there in all?

Solution: _____

(2) How many students are there having marks more than 50.?

Solution: _____

(3) How many students are there having marks less than or equal to 55?

Solution: _____

(4) 62 of the students in range 45-55 left the college. How many students are left in this range?

Solution: _____

(5) In which range maximum students are there?

Solution: _____

(6) In which range minimum students are there?

Solution: _____

(7) Students having marks between 50-65 are _____?

Solution: _____

(8) Students having marks 66-70 is _____ more/less than students having marks 56-60.

Solution: _____

(9) 22 of the students in range 56-60 left the college. How many students are there now in this range?

Solution: _____

(10) The college is organising an event in which students having marks more than 55 can participate. How many students can participate in this event?

Solution: _____

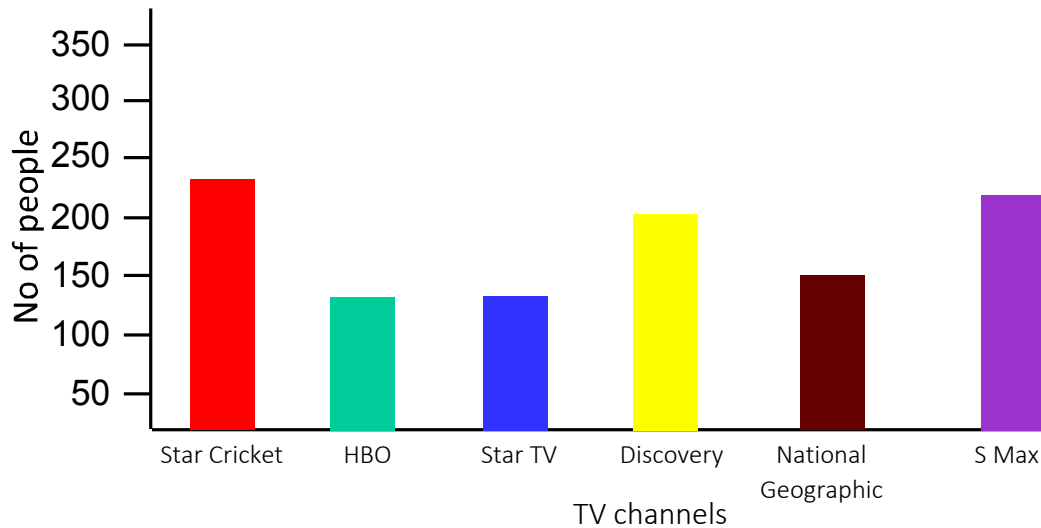
Graphical analysis

Bar graph tables



Name: _____ Date: ____/____/____ Score _____

TV channels Survey



Star Cricket	235
HBO	125
Star TV	126
Discovery	203
National	145
S Max	221

Questions:

(1) How many people chose S Max as their favourite TV channels?

Solution: _____

(2) People who chose HBO as their favourite TV channels is _____ more/less than people who chose Discovery.

Solution: _____

(3) How many people participated in the survey?

Solution: _____

(4) Who is the fourth most preferred TV channels?

Solution: _____

(5) The most preferred TV channels is _____.

Solution: _____

(6) The least preferred TV channels is _____.

Solution: _____

(7) People who chose Star Cricket as their favourite TV channels is _____ more/less than people who chose National Geographic.

Solution: _____

(8) If we arrange the TV channels in the descending order of likings of people then what will be at third place.

Solution: _____

(9) People who chose National Geographic or Discovery is _____ more/less than people who chose HBO or S Max.

Solution: _____

(10) If we arrange the TV channels in the descending order of likings of people then what will be at 2nd place?

Solution: _____

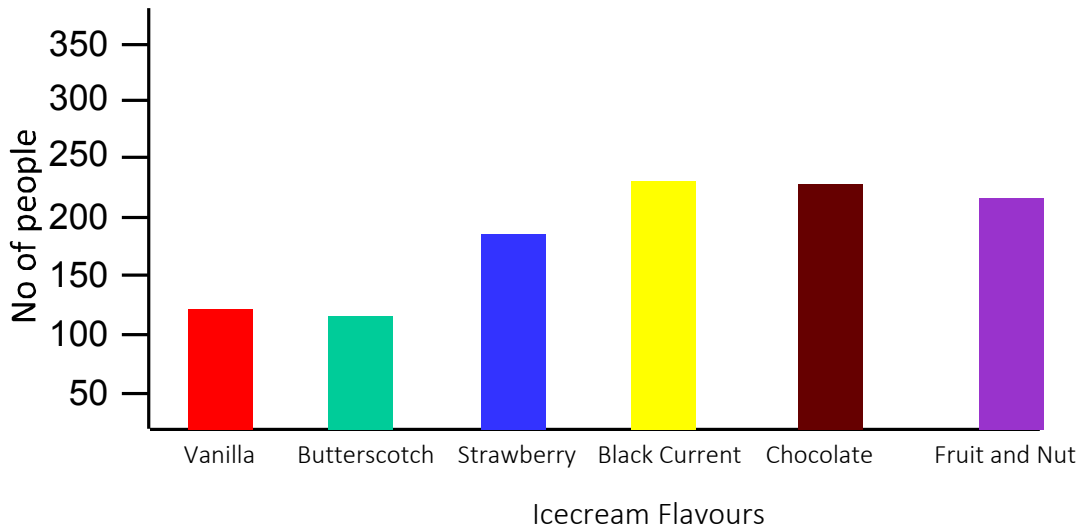
Graphical analysis

Bar graph tables



Name: _____ Date: ____/____/____ Score _____

Icecream Flavours Survey



Vanilla	113
Butterscotch	106
Strawberry	183
Black Current	233
Chocolate	230
Fruit and Nut	217

Questions:

(1) How many people chose Fruit and Nut as their favourite Icecream Flavours?

Solution: _____

(2) People who chose Butterscotch as their favourite Icecream Flavours is _____ more/less than people who chose Black Current.

Solution: _____

(3) How many people participated in the survey?

Solution: _____

(4) Who is the fourth most preferred Icecream Flavours?

Solution: _____

(5) The most preferred Icecream Flavours is _____.

Solution: _____

(6) The least preferred Icecream Flavours is _____.

Solution: _____

(7) People who chose Vanilla as their favourite Icecream Flavours is _____ more/less than people who chose Chocolate.

Solution: _____

(8) If we arrange the Icecream Flavours in the descending order of likings of people then what will be at third place.

Solution: _____

(9) People who chose Chocolate or Black Current is _____ more/less than people who chose Butterscotch or Fruit and Nut.

Solution: _____

(10) If we arrange the Icecream Flavours in the descending order of likings of people then what will be at 2nd place?

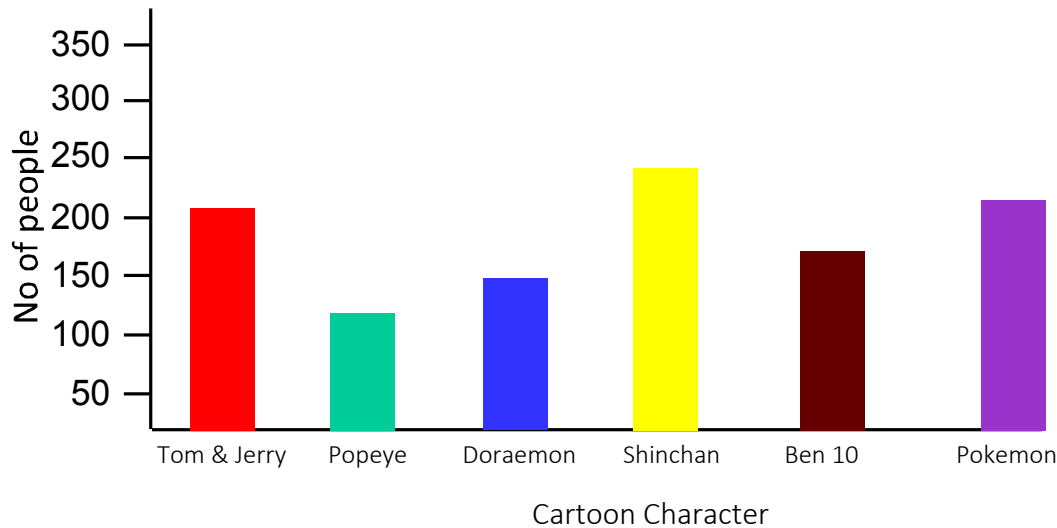
Graphical analysis

Bar graph tables



Name: _____ Date: ____/____/____ Score _____

Cartoon Character Survey



Tom & Jerry	208
Popeye	110
Doraemon	142
Shinchan	246
Ben 10	168
Pokemon	216

Questions:

(1) How many people chose Pokemon as their favourite Cartoon Character?

Solution: _____

(2) People who chose Popeye as their favourite Cartoon Character is _____ more/less than people who chose Shinchan.

Solution: _____

(3) How many people participated in the survey?

Solution: _____

(4) Who is the fourth most preferred Cartoon Character?

Solution: _____

(5) The most preferred Cartoon Character is _____.

Solution: _____

(6) The least preferred Cartoon Character is _____.

Solution: _____

(7) People who chose Tom & Jerry as their favourite Cartoon Character is _____ more/less than people who chose Ben 10.

Solution: _____

(8) If we arrange the Cartoon Character in the descending order of likings of people then what will be at third place.

Solution: _____

(9) People who chose Ben 10 or Shinchon is _____ more/less than people who chose Popeye or Pokemon.

Solution: _____

(10) If we arrange the Cartoon Character in the descending order of likings of people then what will be at 2nd place?

Solution: _____